

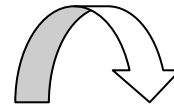
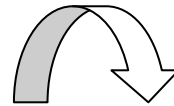
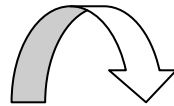
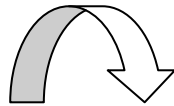
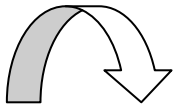
Wie viele Rauten musst du streichen, damit 2 übrig bleiben?



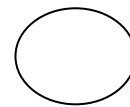
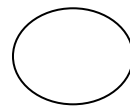
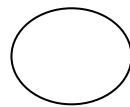
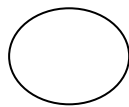
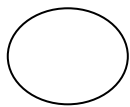
Wie viele Sterne musst du streichen, damit 1 übrig bleibt?



Wie viele Vierecke musst du streichen, damit 4 übrig bleiben?



Wie viele Pfeile musst du streichen, damit 3 übrig bleiben?



Wie viele Kreise musst du streichen, damit 0 übrig bleiben?