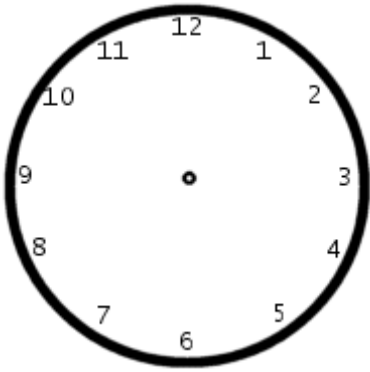


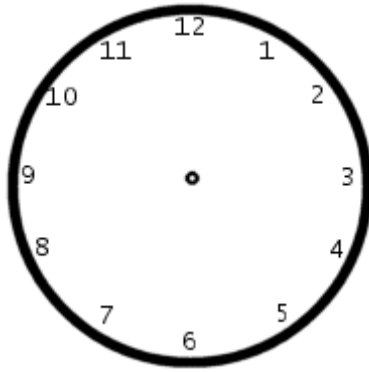
## Arbeitsblatt 7

Die Uhr

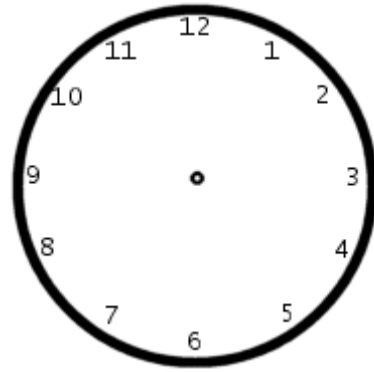
Zeichne folgende Uhrzeiten ein!



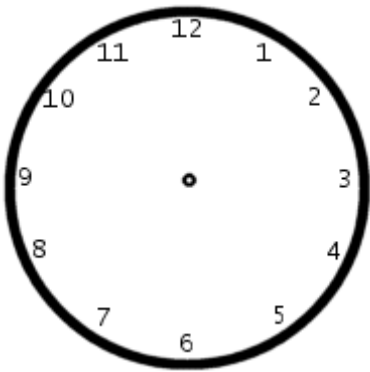
7 Uhr



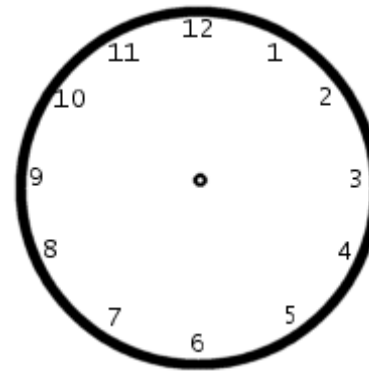
10 Uhr



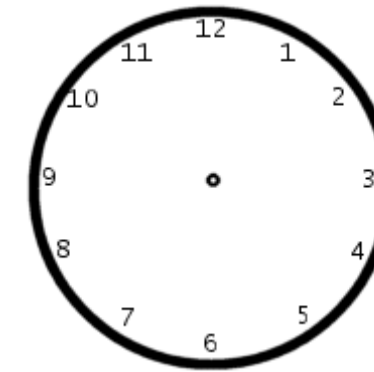
15 Uhr



14 Uhr



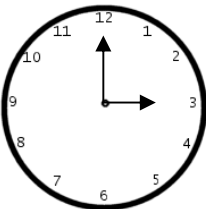
12 Uhr



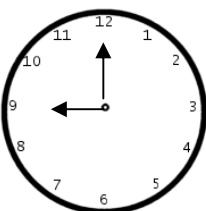
20 Uhr



Wie spät ist es? Kreuze die richtige Uhrzeit an!



- 03.00 Uhr
- 05.00 Uhr
- 07.00 Uhr
- 09.00 Uhr



- 10.00 Uhr
- 14.00 Uhr
- 21.00 Uhr
- 23.00 Uhr