





Ergänzungsaufgaben im Zahlenraum 10

$3 + \underline{\quad} = 6$		+		=	
-----------------------------	---	---	--	---	---

$3 + \underline{\quad} = 8$		+		=	
-----------------------------	---	---	--	---	---

$5 + \underline{\quad} = 10$		+		=	
------------------------------	--	---	--	---	--

$5 + \underline{\quad} = 8$		+		=	
-----------------------------	--	---	--	---	--

$1 + \underline{\quad} = 7$		+		=	
-----------------------------	--	---	--	---	--

$7 + \underline{\quad} = 10$		+		=	
------------------------------	--	---	--	---	--




$5 + \underline{\quad} = 10$		+		=	
------------------------------	--	---	--	---	--

$5 + \underline{\quad} = 10$		+		=	
------------------------------	--	---	--	---	--

$5 + \underline{\quad} = 10$		+		=	
------------------------------	--	---	--	---	--

--	--	--	--	--	--

Ergänzungsaufgaben im Zahlenraum 10

$2 + \underline{\quad} = 5$		+		=	
-----------------------------	---	---	--	---	---

$1 + \underline{\quad} = 8$		+		=	
-----------------------------	---	---	--	---	---

$8 + \underline{\quad} = 10$		+		=	
------------------------------	--	---	--	---	--

$2 + \underline{\quad} = 8$		+		=	
-----------------------------	--	---	--	---	--

$1 + \underline{\quad} = 3$		+		=	
-----------------------------	--	---	--	---	--




$7 + \underline{\quad} = 9$		+		=	
-----------------------------	--	---	--	---	--

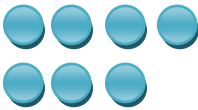

$2 + \underline{\quad} = 8$		+		=	
-----------------------------	--	---	--	---	--

$4 + \underline{\quad} = 8$		+		=	
-----------------------------	--	---	--	---	--

$1 + \underline{\quad} = 10$		+		=	
------------------------------	--	---	--	---	--

Ergänzungsaufgaben im Zahlenraum 10

$6 - \underline{\quad} = 3$		-		=	
-----------------------------	---	---	--	---	---

$7 - \underline{\quad} = 4$		-		=	
-----------------------------	---	---	--	---	---

$10 - \underline{\quad} = 10$		-		=	
-------------------------------	--	---	--	---	--

$8 - \underline{\quad} = 2$		-		=	
-----------------------------	--	---	--	---	--

$7 - \underline{\quad} = 2$		-		=	
-----------------------------	--	---	--	---	--

$7 - \underline{\quad} = 6$		-		=	
-----------------------------	--	---	--	---	--




$10 - \underline{\quad} = 4$		-		=	
------------------------------	--	---	--	---	--


$8 - \underline{\quad} = 4$		-		=	
-----------------------------	--	---	--	---	--

--	--	--	--	--	--

$3 - \underline{\quad} = 0$		-		=	
-----------------------------	--	---	--	---	--

Ergänzungsaufgaben im Zahlenraum 10

$6 - \underline{\quad} = 4$		-		=	
-----------------------------	---	---	---	---	---

$5 - \underline{\quad} = 0$		-		=	
-----------------------------	---	---	--	---	--

$5 - \underline{\quad} = 5$		-		=	
-----------------------------	--	---	--	---	--

$6 - \underline{\quad} = 3$		-		=	
-----------------------------	--	---	--	---	--

$7 - \underline{\quad} = 4$		-		=	
-----------------------------	--	---	--	---	--

$9 - \underline{\quad} = 6$		-		=	
-----------------------------	--	---	--	---	--

$8 - \underline{\quad} = 1$		-		=	
-----------------------------	--	---	--	---	--

$7 - \underline{\quad} = 4$		-		=	
-----------------------------	--	---	--	---	--

$2 - \underline{\quad} = 1$		-		=	
-----------------------------	--	---	--	---	--