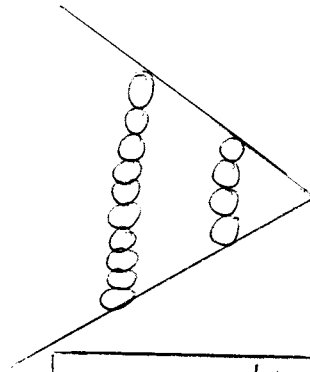
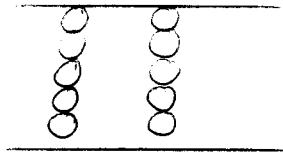
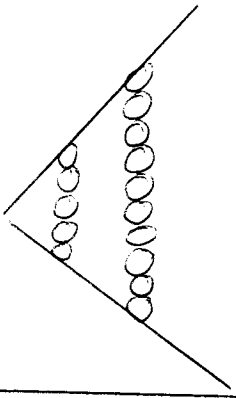


# Kleiner, größer, gleich



$$5 < 10$$



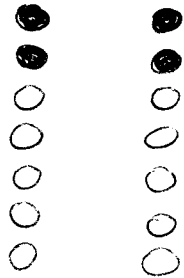

$$5 = 5$$

$$10 > 4$$

5 ist kleiner als 10

10 ist größer als 5

## Aufgaben:



$$3 < 7$$

$$5 \square 4$$

$$4 \square 10$$

$$6 \square 6$$

$$7 \square 7$$

$$5 \square 10$$

$$8 \square 4$$

$$7 \square 2$$

$$6 \square 7$$

$$4 \square 2$$

$$7 \square 3$$

$$5 \square 8$$

$$7 \square 6$$