

1

6 + \_\_\_ = 10

4 + \_\_\_ = 9

1 + \_\_\_ = 5

2 + \_\_\_ = 9

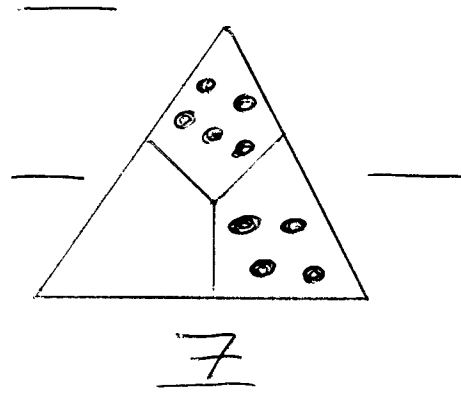
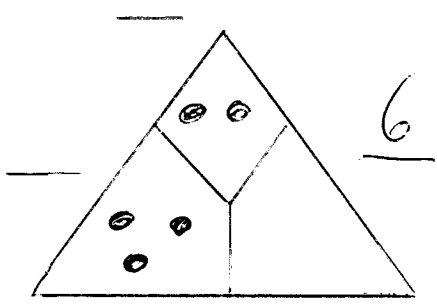
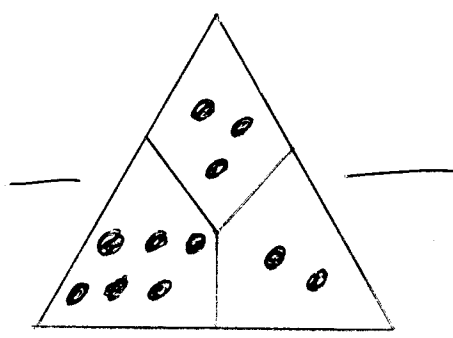
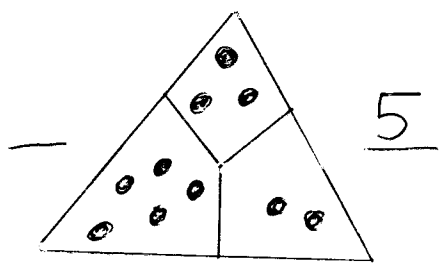
2 + \_\_\_ = 8

2 + \_\_\_ = 5

3 + \_\_\_ = 10

7 + \_\_\_ = 8

2



3

