

Fülle erst den Zehner auf und rechne dann den Rest.

●	●	●	●	●	●	●	●	●	

$$\underline{9 + 2 =}$$

$$_ + _ = _$$

$$_ + _ = _$$

$$\underline{9 + 3 =}$$

$$_ + _ = _$$

$$_ + _ = _$$

$$\underline{9 + 4 =}$$

$$_ + _ = _$$

$$_ + _ = _$$

$$\underline{9 + 5 =}$$

$$_ + _ = _$$

$$_ + _ = _$$

$$\underline{9 + 6 =}$$

$$_ + _ = _$$

$$_ + _ = _$$

$$\underline{9 + 7 =}$$

$$_ + _ = _$$

$$_ + _ = _$$

$$\underline{9 + 8 =}$$

$$_ + _ = _$$

$$_ + _ = _$$

$$_ + _ = _$$

$$\underline{9 + 9 =}$$

$$_ + _ = _$$

$$_ + _ = _$$

$$_ + _ = _$$

Fülle erst den Zehner auf und rechne dann den Rest.

●	●	●	●	●					

$$\underline{5 + 6 =}$$

$$_ + _ = _$$

$$_ + _ = _$$

$$\underline{5 + 7 =}$$

$$_ + _ = _$$

$$_ + _ = _$$

$$\underline{5 + 8 =}$$

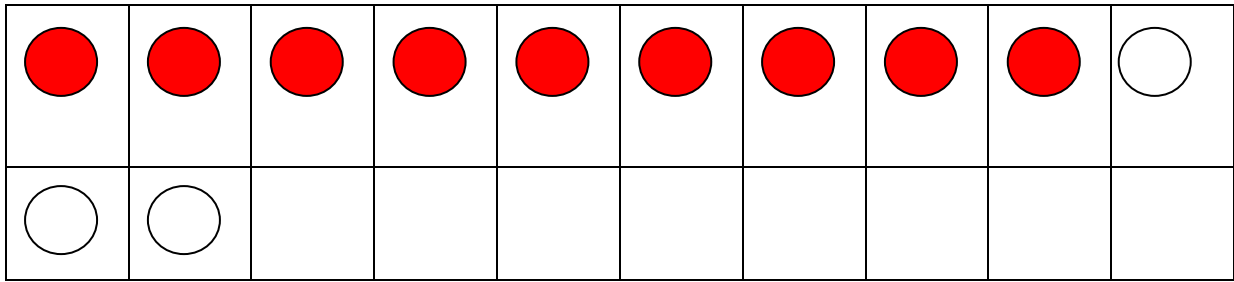
$$_ + _ = _$$

$$_ + _ = _$$

$$\underline{5 + 9 =}$$

$$_ + _ = _$$

$$_ + _ = _$$



$$\underline{9 + 3 =}$$

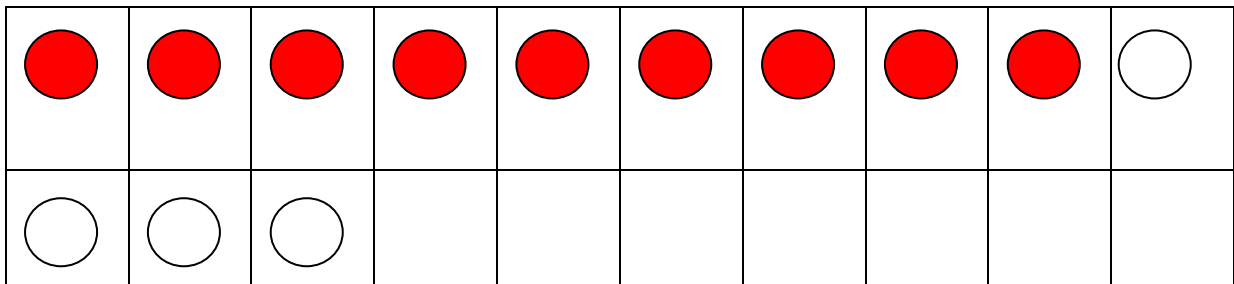
Ergänze zuerst zum Zehner,

$$9 + 1 = 10$$

dann rechne den Rest dazu.

$$10 + 2 = 12$$

Das Ergebnis schreibe obenhin.




$$\underline{9 + 4 =}$$

$$9 + 1 = 10$$

$$10 + =$$


Fülle erst den Zehner auf und rechne dann den Rest.



$$\underline{2 + 9 =}$$

$$_ + _ = _$$

$$_ + _ = _$$



$$\underline{3 + 8 =}$$

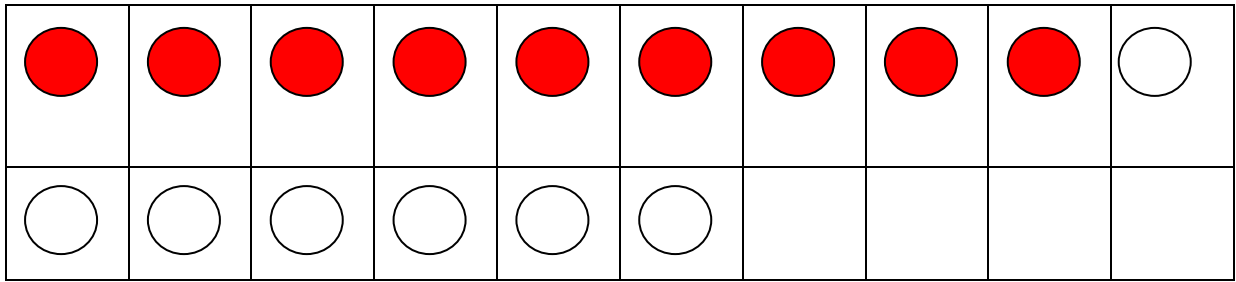
$$_ + _ = _$$

$$_ + _ = _$$

$$\underline{3 + 9 =}$$

$$_ + _ = _$$

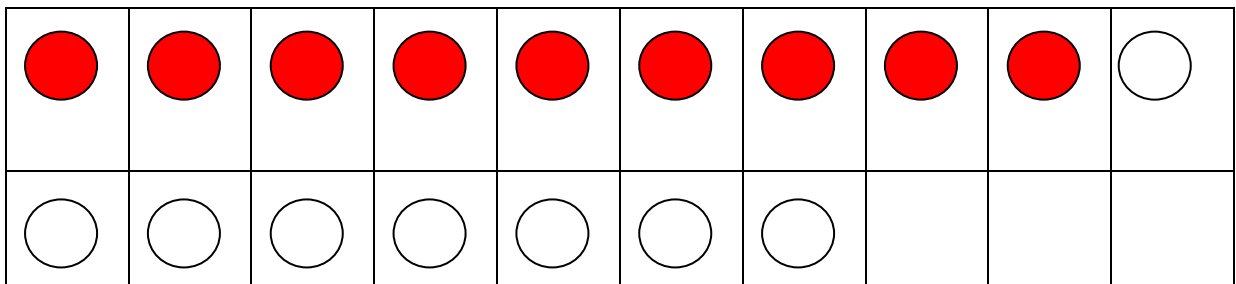
$$_ + _ = _$$



$$\underline{9 + 7 =}$$

$$9 + 1 = 10$$

$$10 + \quad =$$

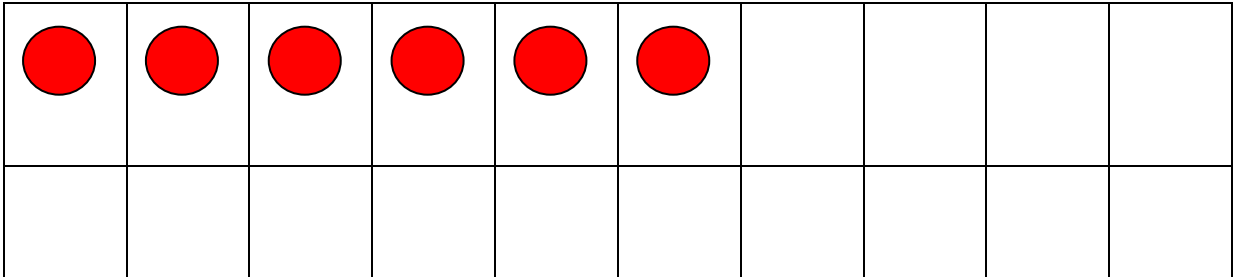


$$\underline{9 + 8 =}$$

$$9 + 1 = 10$$

$$10 + \quad =$$

Fülle zuerst den Zehner auf dann rechne den Rest.



$$6 + 5 = \underline{\quad}$$

$$6 + 6 = \underline{\quad}$$

$$6 + 7 = \underline{\quad}$$

$$6 + _ = 10$$

$$6 + _ = \underline{\quad}$$

$$6 + _ = \underline{\quad}$$

$$_ + _ = \underline{\quad}$$

$$_ + _ = \underline{\quad}$$

$$_ + _ = \underline{\quad}$$

$$\underline{6 + 8 = \quad}$$








$$\underline{6 + 9 = \quad}$$

$$_ + _ = \underline{\quad}$$

$$_ + _ = \underline{\quad}$$

$$_ + _ = \underline{\quad}$$

$$_ + _ = \underline{\quad}$$

$$\underline{7 + 4 = \quad}$$

$$7 + 3 = 10$$

$$10 + _ = _$$

$$\underline{7 + 5 = \quad}$$

$$7 + 3 = 10$$

$$10 + _ = _$$

$$\underline{7 + 6 = \quad}$$

$$7 + _ = _$$

$$_ + _ = _$$

$$\underline{7 + 7 = \quad}$$

$$_ + _ = _$$

$$_ + _ = _$$

$$\underline{7 + 8 = \quad}$$









$$_ + _ = _$$

$$_ + _ = _$$

$$\underline{7 + 9 = \quad}$$

$$_ + _ = _$$

$$_ + _ = _$$

$$\underline{8 + 4 =}$$

$$_ + _ = _$$

$$_ + _ = _$$

$$\underline{8 + 5 =}$$

$$_ + _ = _$$

$$_ + _ = _$$

$$\underline{8 + 6 =}$$

$$_ + _ = _$$

$$_ + _ = _$$

$$\underline{8 + 7 =}$$

$$_ + _ = _$$

$$_ + _ = _$$

$$\underline{8 + 8 =}$$

$$_ + _ = _$$





$$_ + _ = _$$

$$\underline{8 + 9 =}$$

$$_ + _ = _$$

$$_ + _ = _$$

Fülle erst den Zehner auf und rechne dann den Rest.

$$\underline{4 + 7 =}$$

$$_ + _ = _$$

$$_ + _ = _$$

$$\underline{4 + 8 =}$$

$$_ + _ = _$$

$$_ + _ = _$$

$$\underline{4 + 9 =}$$








$$_ + _ = _$$

$$_ + _ = _$$

#

#

#








#

#

#

#

#



#

#