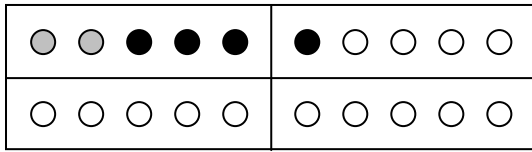
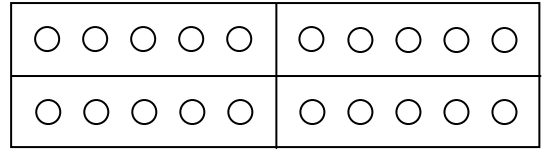


Malen und Rechnen



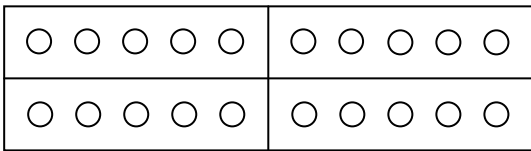
$$\boxed{2} + \boxed{4} = \boxed{}$$

Malen und Rechnen



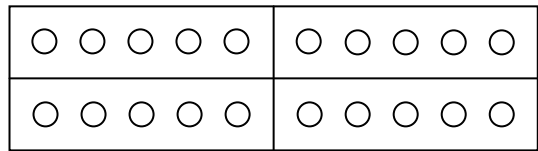
$$\boxed{} + \boxed{} = \boxed{}$$

Malen und Rechnen



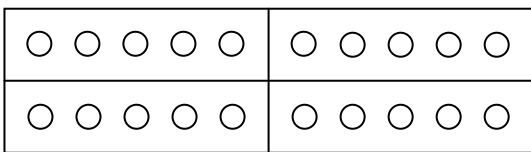
$$\boxed{} + \boxed{} = \boxed{}$$

Malen und Rechnen



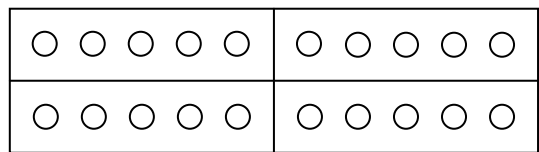
$$\boxed{} + \boxed{} = \boxed{}$$

Malen und Rechnen



$$\boxed{} + \boxed{} = \boxed{}$$

Malen und Rechnen



$$\boxed{} + \boxed{} = \boxed{}$$

A ten-frame with 10 circles. The left side has 5 circles (3 red, 2 blue) and the right side has 5 circles (2 blue, 3 white). Below it is the equation 3 + 4 = 7.

3

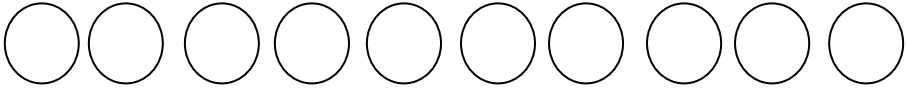
+


4


=


7


Rechne bis 10 und male die Kreise aus!


2+8=


3+7=


1+9=


5+5=


4+6=