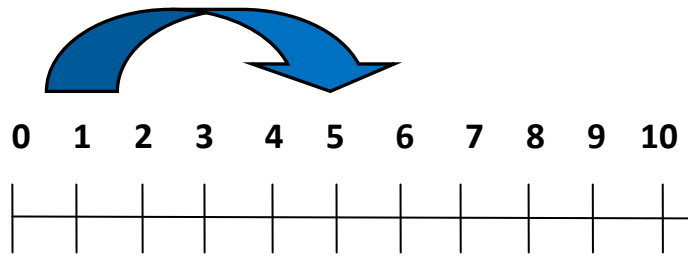


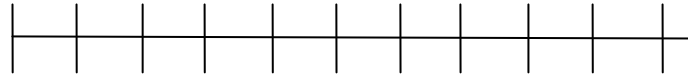
# Rechnen mit dem Zahlenstrahl Addition (ZR 10)

Zeichne auf dem leeren Zahlenstrahl folgende Rechnungen ein:

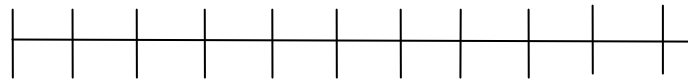
$$1 + 4 = 5$$



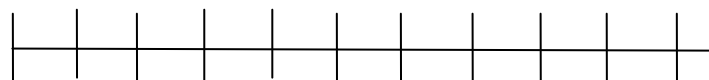
$$2 + 3 = \underline{\quad}$$



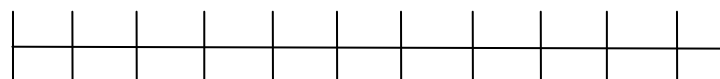
$$3 + 7 = \underline{\quad}$$



$$4 + 1 = \underline{\quad}$$



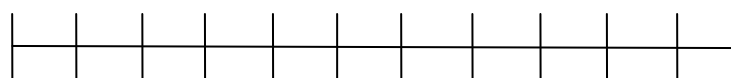
$$5 + 3 = \underline{\quad}$$




$$6 + 4 = \underline{\quad}$$



$$7 + 1 = \underline{\quad}$$



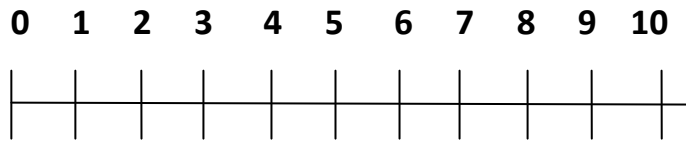
$$8 + 2 = \underline{\quad}$$



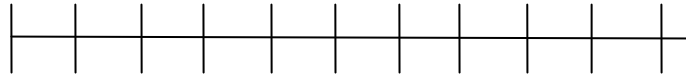
Zeichne auf dem leeren Zahlenstrahl folgende Rechnungen ein:



$$10 - 3 = 7$$



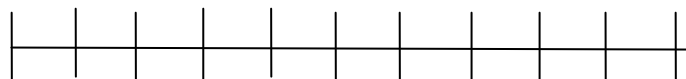
$$9 - 8 = \underline{\quad}$$



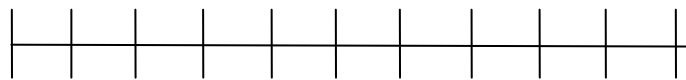
$$8 - 6 = \underline{\quad}$$



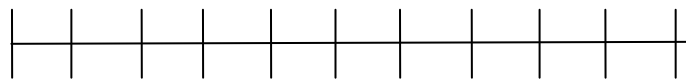
$$7 - 3 = \underline{\quad}$$



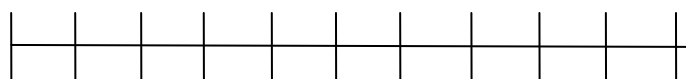
$$6 - 5 = \underline{\quad}$$



$$5 - 1 = \underline{\quad}$$



$$4 - 3 = \underline{\quad}$$



$$3 - 2 = \underline{\quad}$$

