




Ergänze so viele Chips, dass es immer 10 sind!
Schreibe auf, wie viele du ergänzt hast!




$$8 + 2 = 10$$




$$6 + 4 = 10$$



$$3 + 7 = 10$$



$$4 + 6 = 10$$




$$9 + 1 = 10$$



$$2 + 8 = 10$$



$$5 + 5 = 10$$



$$7 + 3 = 10$$



$$1 + 9 = 10$$

Zahlenmuster mit Chips

2 4 _____ _____ _____ gerade

1 _____ _____ _____ _____ ungerade

$8 + 2 =$

$5 + 3 =$

$4 + 3 =$


$8 + 2$

$+ =$

$+ =$

Plättchen werfen

1.



2.

Plättchen werfen mit 5
