

Geld

Wie viel Euro sind es?



Φ Δ ↔ ♠ _____

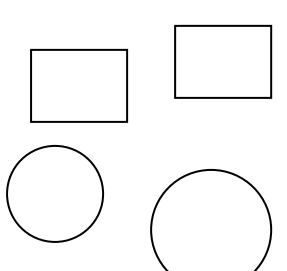
Γ Δ Σ Γ

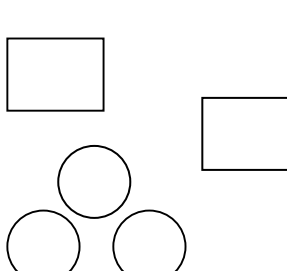
↔ ↔ _____

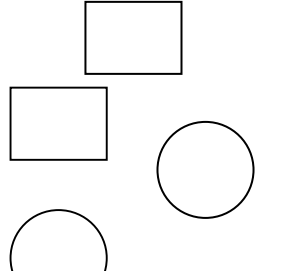
∩ Η Φ Α ♠ ↔ _____

Welche Münzen und Scheine sind es ? Trage ein !




23 €


28 €


44 €