







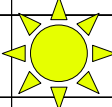




In welchem Zahlenfeld befinden sich die Bilder?

1	2	3	4	5	6	7	8	9	10
11		13	14	15	16		18	19	20
21	22	23	24		26	27	28	29	
31	32	33	34	35	36	37	38	39	40
41	42	43	44	45	46		48	49	50
51	52		54	55	56	57	58	59	60
	62	63	64	65		67	68	69	70
71	72	73	74	75	76	77	78		80
81	82	83		85	86	87	88	89	90
91	92	93	94	95	96		98	99	100

