

ARBEITSBLATT 4:

Rechnen mit 10er-Übergang

$6+6=$ ___	$6+7=$ ___
$7+6=$ ___	$7+7=$ ___

$$\underline{8 + 5 = \quad}$$

$$\underline{9 + 6 = \quad}$$

$$\underline{7 + 4 = \quad}$$

$$8 + \underline{\quad} = 10$$

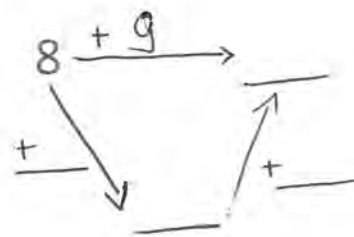
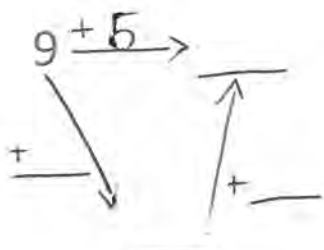
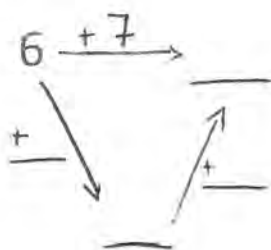
$$9 + \underline{\quad} = 10$$

$$7 + \underline{\quad} = 10$$

$$10 + \underline{\quad} = \underline{\quad}$$

$$10 + \underline{\quad} = \underline{\quad}$$

$$10 + \underline{\quad} = \underline{\quad}$$



$$8+6=$$

$$7+5=$$

$$9+8=$$

$$6+5=$$

$$4+9=$$

$$7+9=$$

Ergänze die Eulen:

