






1




2




3



4



5




6



7



8



9



10

Erkenne die dargestellte Zahl auf einen Blick!

