
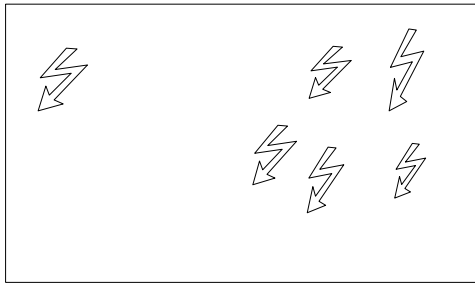


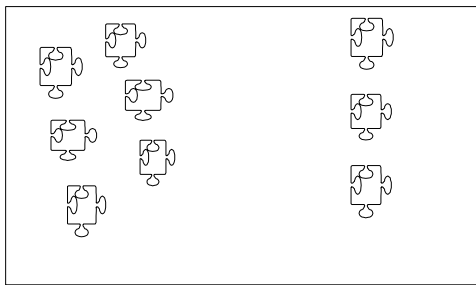
Verbinde die Rechengeschichten mit den passenden Rechnungen!



$6 + 3 = \underline{\quad}$



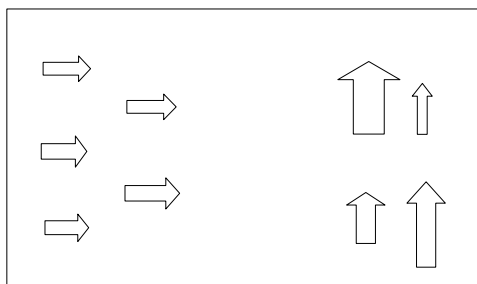
$5 + 4 = \underline{\quad}$



$2 + 3 = \underline{\quad}$



$1 + 5 = \underline{\quad}$



$4 + 3 = \underline{\quad}$



$2 + 4 = \underline{\quad}$