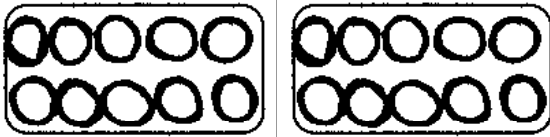
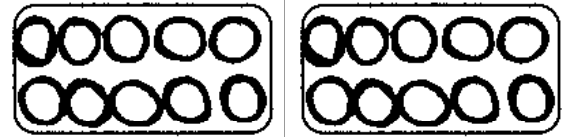


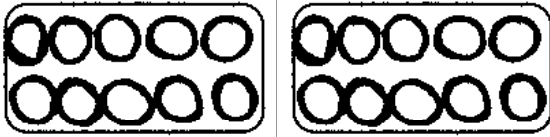
Male die Menge der ersten Zahl in rot und die der zweiten in blau aus und bestimme hinterher, auf welcher Seite mehr Punkte sind. z.B.



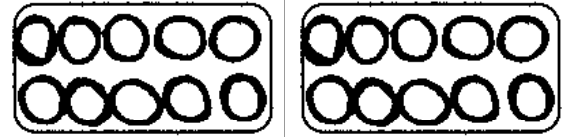
$$\begin{array}{r} 9 + 7 = \\ 9 + 1 = 10 \\ 10 + 6 = 16 \\ = 17 \end{array}$$



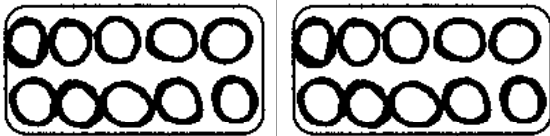
$$\begin{array}{r} 8 + 9 = \\ 8 + 2 = 10 \\ 10 + 7 \end{array}$$



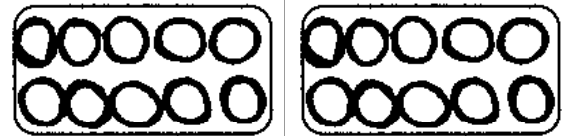
$$\begin{array}{r} 5 + 12 = \\ 5 + \quad = 10 \\ 10 + \quad = \\ + \quad = \end{array}$$



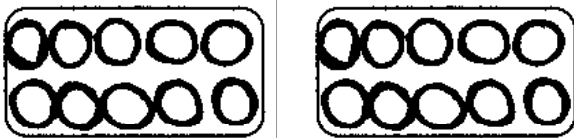
$$\begin{array}{r} 7 + 9 = \\ 7 + \quad = \\ \quad = 10 \end{array}$$



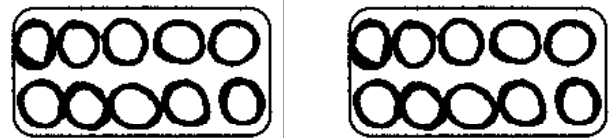
$$8 + 5 =$$



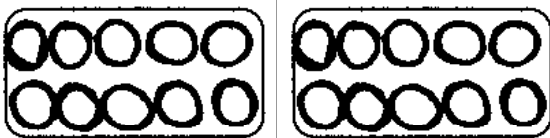
$$6 + 8 =$$



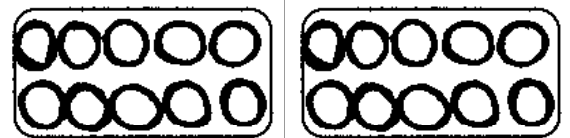
$$6 + 7 =$$



$$5 + 14 =$$

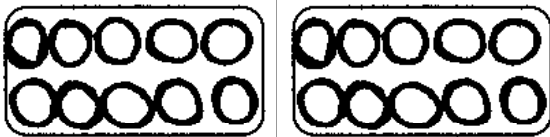


$$7 + 4 =$$

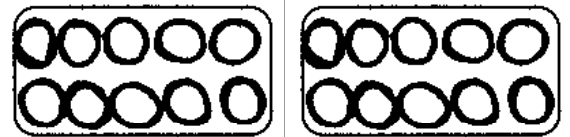


$$3 + 15 =$$

≡



$$5 + 12 =$$



$$4 + 15 =$$

≡