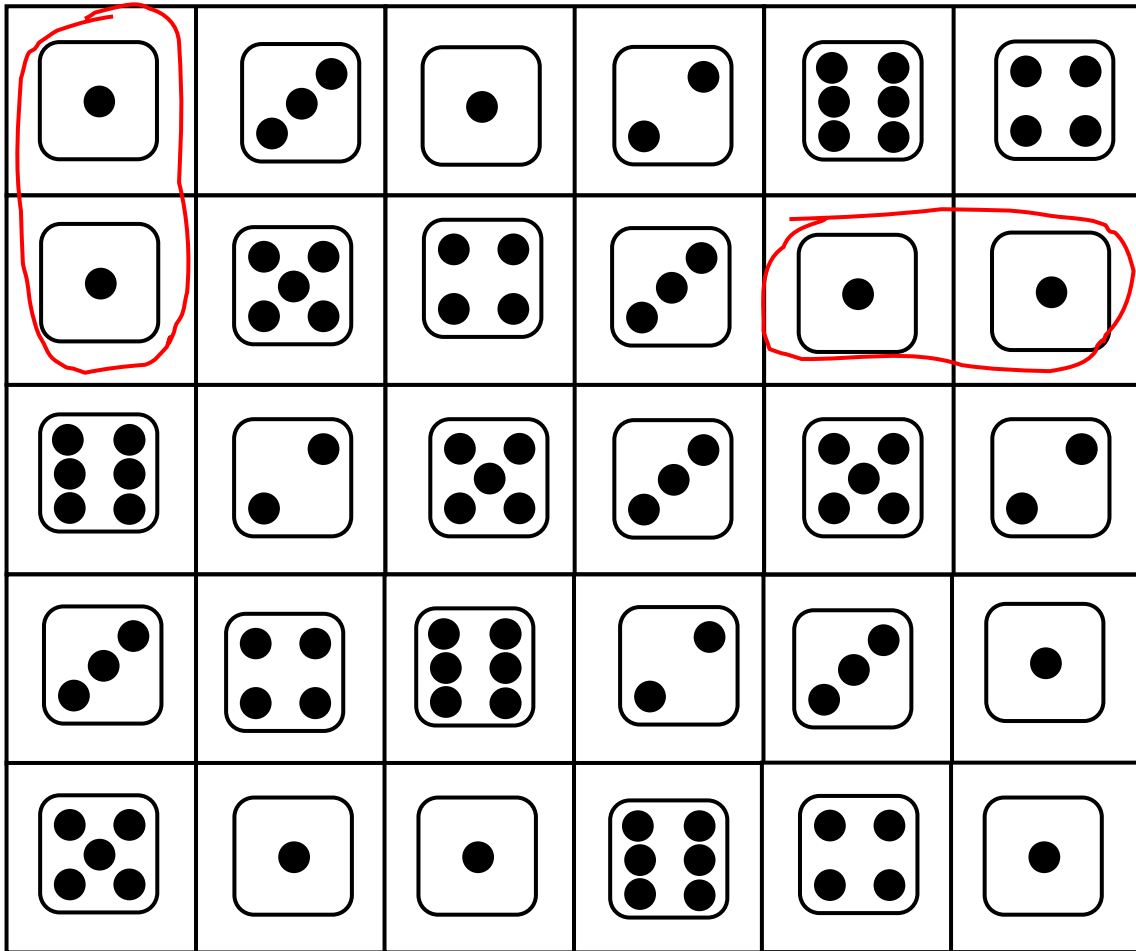


Verbinde die Würfelbilder.

Zusammen immer 2



Nach hinten falten!

$$\begin{array}{c} \square \text{ (1 dot)} \\ + \\ \square \text{ (1 dot)} \\ \hline \square \end{array}$$
$$\begin{array}{c} \square \text{ (1)} \\ + \\ \square \text{ (1)} \\ = \\ \square \end{array}$$

Zusammen immer 3



+ =



+ =

Zusammen immer 4



$$\square + \square = \square$$



$$\square + \square = \square$$

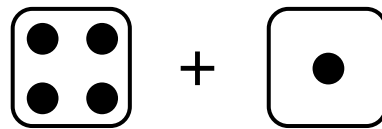


$$\square + \square = \square$$

Zusammen immer 5



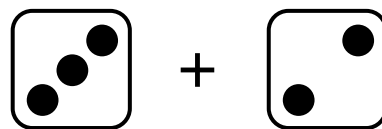
$$\square + \square = \square$$



$$\square + \square = \square$$

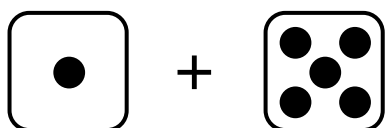


$$\square + \square = \square$$



$$\square + \square = \square$$


Zusammen immer 6



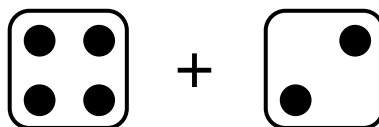
$$\square + \square = \square$$



$$\square + \square = \square$$



$$\square + \square = \square$$



$$\square + \square = \square$$



$$\square + \square = \square$$