


Name: _____

Äpfel verkaufen

Lege mit dem Material und zeichne:




7 kg



15 kg



20 kg



30 kg



43 kg




26 kg




65 kg




38 kg




75 kg



56 kg



82



29 kg

Notiere das Gewicht

